

Count with Mouse!


All of Mouse's objects are stored in pairs,
can you count them two by two to find how many there are?

How many mushrooms?




6

How many grasshoppers?




How many flowers?



How many ladybirds?



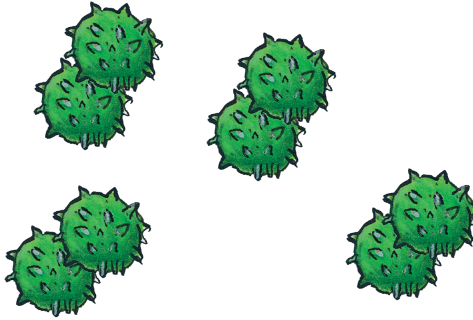
How many acorns?




How many apples?




How many conkers?



How many pinecones?



How many sycamore seeds?



How many brown leaves?



How many green leaves?

